



GIMNASIO LOS PIRINEOS


“EDUCACIÓN Y FORMACIÓN INTEGRAL CON ENFASIS EN VALORES, INGLÉS, EMPRENDIMIENTO Y GESTIÓN LABORAL”.

TALLER DE RECUPERACIÓN SCIENCE- SECOND GRADE

ESTUDIANTE: _____ FECHA: _____

1. Write the body parts

Parts of the Body




mouth eye leg
arm ear toe hair
foot hand nose finger

2. Tick the correct answer




This is my foot
 arm
 leg




This is my ear
 head
 nose



This is my eye
 ear
 nose



This is my toe
 finger
 knee



This is my hair
 mouth
 hand



This is my shoulder
 toe
 finger



This is my ear
 hand
 eye

3. Match with colors



Arm

Leg

Toes

Head

Knee

Foot

Hand

Fingers

4. Complete the sentences

see - smell - hear - touch - taste

I can with my eyes.

I can with my ears.


I can with my hands.

I can with my nose.

I can with my tongue.



5. Write the correct sense



6. Draw five living things and five non living things

7. Read and answer the question

Living and Non-living


Living things can be plants or animals that are alive. They need food, air, and water to live. Living things eat, move, breathe, grow, and reproduce. **Non-living** things are not alive. They do not move, eat, or grow.

Complete the sentences using words from the box.

living non-living food grow water

1. All living things need air, water, and .
2. You are a thing.
3. A thing does not move or grow.
4. A puppy is a living thing. It can move and .
5. A plant needs in order to survive.
8. Draw and write two animals and plants what can you find in a garden?
9. Draw and write two animals and plants what can you find in a pond?
10. Draw and write two animals and plants what can you find in a beach?

11. Listen and choose



12.

WHAT IS THE WEATHER LIKE?



It is
rainy



It is
sunny



It is
cloudy



It is
windy



It is
snowy

13. Draw and write the types of rocks

14. Answer the questions

a. What is the second planet? _____

b. What is the fourth planet? _____

c. What is the smaller planet? _____

d. What is the third planet? _____

15. Draw the solar system